
































Greetings, Second Graders! Here's a little worksheet to help you learn/review note and rest values (how long a note or rest lasts). One side is information, the other side is the worksheet.

After you've finished this paper, save it for the information. You will need it in the weeks ahead.

Remember, you can go to quavermusic.com for more musical things to do. If you are able to go online.

We miss you-Ms. Brown or Ms. Hodgdon

Whole Note	4 Beats																
Half Note	2 Beats																
Quarter Note	1 Beat																
Eighth Note	1/2 Beat																
Sixteenth Note	1/4 Beat	               															

Rhythm Addition:

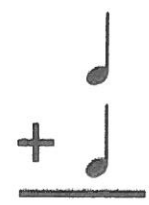


Add the total number of beats in each equation.

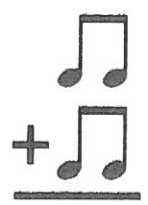
Name _____

Class _____

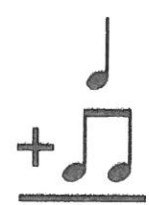
1.



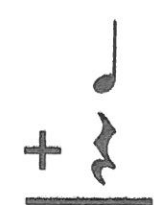
2.




3.



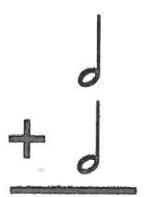
4.



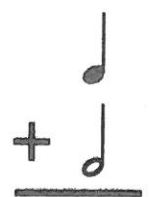
5.




6.



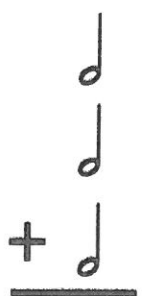
7.



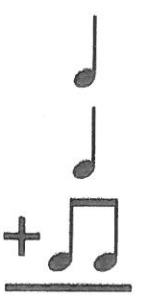
8.



9.



10.



11.



12.

