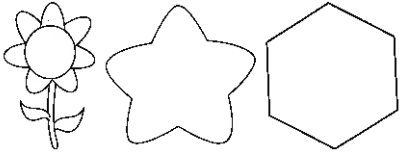

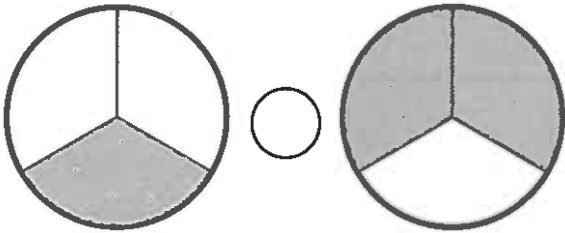


Name _____

<p>1. List the factors of 35.</p> <p>Is this number prime or composite?</p>	<p>2. Determine the 20th shape in the pattern.</p> 
<p>3. Write the number in standard form.</p> <p>one hundred forty thousand six hundred eighty-seven.</p>	<p>4. Round 87,658 to the nearest thousand.</p>
<p>5. $2,606 + 7,025 =$</p>	<p>6. $9,379 - 4,312 =$</p>
<p>7. $60,000 \div 6,000 =$</p>	<p>8. Divide the rectangle into eighths and shade the pieces to show the fraction $\frac{2}{8}$.</p> 
<p>9. Write $<$, $>$, or $=$ to make the statement true.</p> 	<p>10. $5 \times 9 =$</p> <p>$35 \div 5 =$</p> <p>$36 \div 9 =$</p>