

Name _____

$$\begin{array}{r} 443 \\ +236 \\ \hline \end{array}$$

$$\begin{array}{r} 242 \\ +514 \\ \hline \end{array}$$

$$\begin{array}{r} 383 \\ +115 \\ \hline \end{array}$$

$$\begin{array}{r} 456 \\ +322 \\ \hline \end{array}$$

$$\begin{array}{r} 650 \\ +239 \\ \hline \end{array}$$

$$\begin{array}{r} 475 \\ +204 \\ \hline \end{array}$$

$$\begin{array}{r} 424 \\ +274 \\ \hline \end{array}$$

$$\begin{array}{r} 247 \\ +430 \\ \hline \end{array}$$

$$\begin{array}{r} 277 \\ +11 \\ \hline \end{array}$$

$$\begin{array}{r} 121 \\ +265 \\ \hline \end{array}$$

$$\begin{array}{r} 243 \\ +346 \\ \hline \end{array}$$

$$\begin{array}{r} 255 \\ +334 \\ \hline \end{array}$$


$$\begin{array}{r} 443 \\ +401 \\ \hline \end{array}$$

$$\begin{array}{r} 334 \\ +235 \\ \hline \end{array}$$

$$\begin{array}{r} 243 \\ +55 \\ \hline \end{array}$$

$$\begin{array}{r} 642 \\ +246 \\ \hline \end{array}$$

Addition & Subtraction Choice Board



Tens	Ones

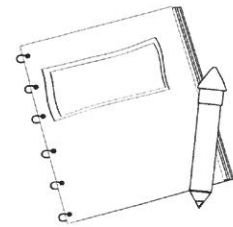
High Rollers

Roll two dice and record the two digit number. Roll two more dice and record the two digit number. Add the two numbers together. Repeat.




Board Game Builder

Create an addition and subtraction game board. Include an answer key.



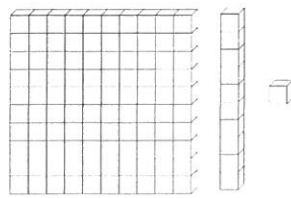
Shop 'Til You Drop

Create prices in dollars (no cents) for your own shop. Then add up buying certain items from the store. Record how much it would cost to buy certain items together.



Teach It!

Use base ten blocks, addition problems, and a chromebook to be the teacher. Film a lesson teaching how to add.



Base Ten Blocks

Draw a picture of adding with base ten blocks and subtracting with base ten blocks on a poster.



Math Music

Create a rap, song, or poem that teaches how to add or how to subtract.



Find the Missing Number


$$54 + \underline{\quad} = 60$$

$$15 - \underline{\quad} = 10$$

$$32 + \underline{\quad} = 40$$

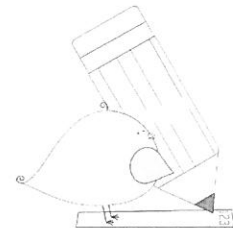
$$89 - \underline{\quad} = 85$$

$$3 + \underline{\quad} + \underline{\quad} = 10$$



Opposites

Did you know subtraction and addition are opposites? Write complete sentences describing why subtraction is opposite of addition.



Story Problems

Create five - ten word problems about addition or subtraction and include an answer key.

Zoo Time Pairs and Trios - Add to 15

Color any two or three numbers that add to 15.



a game for 2 players Need: Pencils

Players take turns to color 2 or 3 numbers that add to 15. The numbers can be anywhere on the board and do not have to be in adjoining squares. For example – on a turn a player could color 8 and 7 or 6, 3 and 6. The last player who can color a pair or a trio that add to 15, is the winner.



Game 1							
1	4	12	8	5	4	2	8
6	9	4	1	9	6	9	3
5	3	2	6	3	7	5	12
10	7	9	5	11	1	9	2
	4	8	3	2	7	4	8
		7	11	1	10	3	
		5	14	6	13		

Game 2							
5	12	2	13	4	9	1	11
1	4	8	1	6	7	10	5
6	14	3	5	8	3	9	2
4	2	6	7	4	7	6	8
8	7	0	8	9	3	9	5
3	9	11	2	4	13		
12	1	7	10	6			



Name _____

$$\begin{array}{r} 447 \\ +236 \\ \hline \end{array}$$

$$\begin{array}{r} 342 \\ +516 \\ \hline \end{array}$$

$$\begin{array}{r} 387 \\ +145 \\ \hline \end{array}$$

$$\begin{array}{r} 448 \\ +369 \\ \hline \end{array}$$

$$\begin{array}{r} 668 \\ +279 \\ \hline \end{array}$$

$$\begin{array}{r} 469 \\ +275 \\ \hline \end{array}$$

$$\begin{array}{r} 429 \\ +277 \\ \hline \end{array}$$

$$\begin{array}{r} 267 \\ +450 \\ \hline \end{array}$$

$$\begin{array}{r} 298 \\ +333 \\ \hline \end{array}$$

$$\begin{array}{r} 456 \\ +289 \\ \hline \end{array}$$

$$\begin{array}{r} 274 \\ +398 \\ \hline \end{array}$$

$$\begin{array}{r} 255 \\ +378 \\ \hline \end{array}$$

$$\begin{array}{r} 279 \\ +471 \\ \hline \end{array}$$


$$\begin{array}{r} 326 \\ +209 \\ \hline \end{array}$$

$$\begin{array}{r} 259 \\ +684 \\ \hline \end{array}$$

$$\begin{array}{r} 457 \\ +266 \\ \hline \end{array}$$

Shark Bump

Add or Subtract – Roll 2 and Add or Subtract



a game for 2 players

Need: 2 dice and 10 counters per player – each player uses a different color

To Play: Players take turns to roll the 2 dice and then choose to add the 2 numbers or subtract one from the other. Then they cover this number with one of their counters, covering the large number. If another player has covered that number, they can 'bump' that counter off and put one of their own counters on it. If that number is covered by one of the player's own counters, they can add another counter on top and then they have won that space. You can only 'bump' when there is only one counter on the number. The winner of the game is the first player to use all 10 of their counters.

Name _____

$$\begin{array}{r} 107 \\ +268 \\ \hline \end{array}$$

$$\begin{array}{r} 335 \\ +472 \\ \hline \end{array}$$

$$\begin{array}{r} 157 \\ +142 \\ \hline \end{array}$$

$$\begin{array}{r} 337 \\ +487 \\ \hline \end{array}$$

$$\begin{array}{r} 299 \\ +309 \\ \hline \end{array}$$

$$\begin{array}{r} 696 \\ +257 \\ \hline \end{array}$$

$$\begin{array}{r} 386 \\ +267 \\ \hline \end{array}$$

$$\begin{array}{r} 265 \\ +460 \\ \hline \end{array}$$

$$\begin{array}{r} 256 \\ +724 \\ \hline \end{array}$$

$$\begin{array}{r} 444 \\ +289 \\ \hline \end{array}$$

$$\begin{array}{r} 476 \\ +389 \\ \hline \end{array}$$

$$\begin{array}{r} 275 \\ +387 \\ \hline \end{array}$$

$$\begin{array}{r} 287 \\ +469 \\ \hline \end{array}$$

$$\begin{array}{r} 398 \\ +228 \\ \hline \end{array}$$

$$\begin{array}{r} 289 \\ +664 \\ \hline \end{array}$$


$$\begin{array}{r} 438 \\ +492 \\ \hline \end{array}$$

Pirate Pairs and Trios - Add to 16

Color any two or three numbers that add to 16.

a game for 2 players Need: Pencils

Players take turns to color 2 or 3 numbers that add to 16. The numbers can be anywhere on the board and do not have to be in adjoining squares. For example – on a turn a player could color 9 and 7 or 5, 3 and 8. The last player who can color a pair or a trio that add to 16, is the winner.



Game 1

8	1	6	10	7	3	12	5
2	14	3	2	4	7	1	8
9	4	9	1	9	8	5	7
6	3	7	5	3	11	2	6
8	2	11	8	15	4	9	
		5	4	1	10	6	
		13	3	12	7	9	



Game 2

7	3	9	5	11	1	8	6
6	15	1	7	4	6	14	2
2	5	4	5	3	8	1	7
9	8	7	2	6	10	3	9
1	0	3	9	6	4	13	
4	8	7					
12	2	5					



Name _____

$$\begin{array}{r} 443 \\ +236 \\ \hline \end{array}$$

$$\begin{array}{r} 242 \\ +514 \\ \hline \end{array}$$

$$\begin{array}{r} 383 \\ +115 \\ \hline \end{array}$$

$$\begin{array}{r} 456 \\ +322 \\ \hline \end{array}$$

$$\begin{array}{r} 650 \\ +239 \\ \hline \end{array}$$

$$\begin{array}{r} 475 \\ +204 \\ \hline \end{array}$$

$$\begin{array}{r} 424 \\ +274 \\ \hline \end{array}$$

$$\begin{array}{r} 247 \\ +430 \\ \hline \end{array}$$

$$\begin{array}{r} 277 \\ +11 \\ \hline \end{array}$$

$$\begin{array}{r} 121 \\ +265 \\ \hline \end{array}$$

$$\begin{array}{r} 243 \\ +346 \\ \hline \end{array}$$

$$\begin{array}{r} 255 \\ +334 \\ \hline \end{array}$$

$$\begin{array}{r} 443 \\ +401 \\ \hline \end{array}$$

$$\begin{array}{r} 334 \\ +235 \\ \hline \end{array}$$

$$\begin{array}{r} 243 \\ +55 \\ \hline \end{array}$$

$$\begin{array}{r} 642 \\ +246 \\ \hline \end{array}$$

Name: _____

Multiple-Step Word Problems



Solve the word problems. Show your work.

- a. Haruto has tomato plants in his backyard. This year the plants grew 127 tomatoes. Birds had eaten 19 of the tomatoes. 23 tomatoes had been ruined by bugs. He picked the rest. How many tomatoes did Haruto pick?
- _____
- b. Webster Elementary School has 124 first graders and 130 second graders. On Friday, 12 first graders and 9 second graders were absent. How many first and second graders were in school on Friday?
- _____
- c. Cole and Bryson went to Video Game Land. Cole won 152 tickets. Bryson won 84 tickets. They want to put their tickets together to get a large toy monkey that costs 300 tickets. How many more tickets do they need?
- _____
- d. Clementine and Jake make cookies for the school bake sale. Clementine baked 72 cookies. Jake baked twice as many as Clementine. How many cookies did they bake altogether?
- _____

Name _____

$$\begin{array}{r} 447 \\ +236 \\ \hline \end{array}$$

$$\begin{array}{r} 342 \\ +516 \\ \hline \end{array}$$

$$\begin{array}{r} 387 \\ +145 \\ \hline \end{array}$$

$$\begin{array}{r} 448 \\ +369 \\ \hline \end{array}$$

$$\begin{array}{r} 668 \\ +279 \\ \hline \end{array}$$

$$\begin{array}{r} 469 \\ +275 \\ \hline \end{array}$$

$$\begin{array}{r} 429 \\ +277 \\ \hline \end{array}$$

$$\begin{array}{r} 267 \\ +450 \\ \hline \end{array}$$

$$\begin{array}{r} 298 \\ +333 \\ \hline \end{array}$$

$$\begin{array}{r} 456 \\ +289 \\ \hline \end{array}$$

$$\begin{array}{r} 274 \\ +398 \\ \hline \end{array}$$

$$\begin{array}{r} 255 \\ +378 \\ \hline \end{array}$$

$$\begin{array}{r} 279 \\ +471 \\ \hline \end{array}$$

$$\begin{array}{r} 326 \\ +209 \\ \hline \end{array}$$

$$\begin{array}{r} 259 \\ +684 \\ \hline \end{array}$$

$$\begin{array}{r} 457 \\ +266 \\ \hline \end{array}$$